





DECIMAL DIVISIONS



$$3 \overline{) 18.06}$$

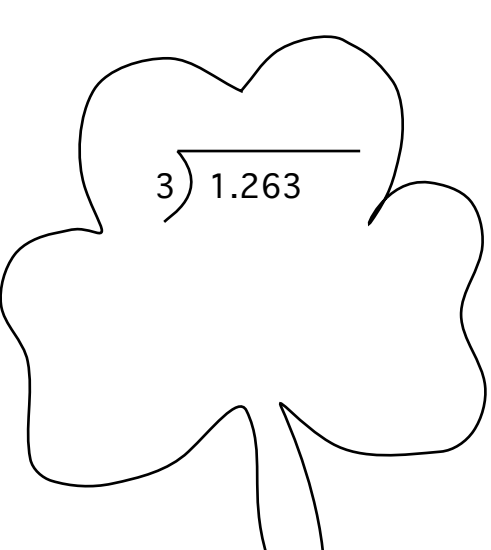

$$5 \overline{) 20.45}$$



$$2 \overline{) 28.84}$$



$$7 \overline{) 21.07}$$


$$4 \overline{) 18.08}$$


$$9 \overline{) 18.90}$$


$$3 \overline{) 1.263}$$


$$3 \overline{) 8.916}$$


$$6 \overline{) 0.048}$$